

# Physics Higher level Paper 2

6 November 2025

Zone A morning | Zone B morning | Zone C morning

Candidate session number

--	--	--	--	--	--	--	--	--	--

2 hours 30 minutes

### Instructions to candidates

- Write your session number in the boxes above.
- Do not open this examination paper until instructed to do so.
- Answer all questions.
- Answers must be written within the answer boxes provided.
- A calculator is required for this paper.
- A clean copy of the **physics data booklet** is required for this paper.
- The maximum mark for this examination paper is **[90 marks]**.

286

A000



22 pages

8825-6709

© International Baccalaureate Organization 2025

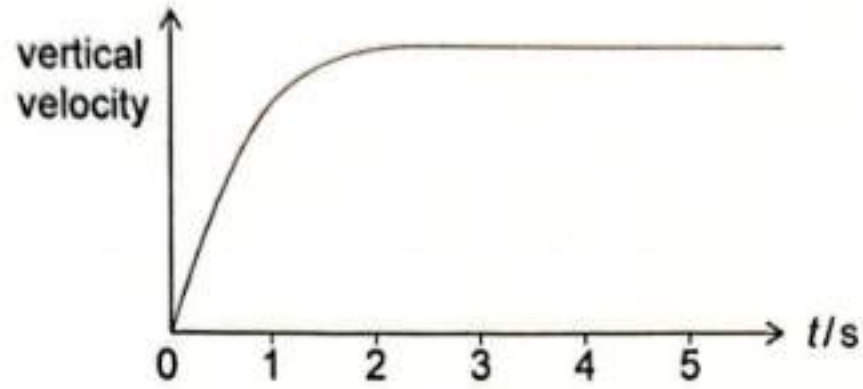


24EP01

Answer all questions. Answers must be written within the answer boxes provided.

1. A spherical oil droplet is released from rest at the bottom of a column of water.

The graph shows the variation with time  $t$  of the vertical velocity of the oil droplet.



(a) The following data are available:

radius of the oil droplet = 3.5 mm

weight of the oil droplet =  $1.6 \times 10^{-3}$  N

density of the water =  $1000 \text{ kg m}^{-3}$

viscosity of the water =  $1.1 \times 10^{-3}$  Pa s

(i) Show that the volume of the oil droplet is about  $2 \times 10^{-7} \text{ m}^3$ . [1]

.....

.....

(ii) Calculate the initial acceleration of the oil droplet. [3]

.....

.....

.....

.....

.....

.....

.....

.....

.....

(This question continues on the following page)



24EP02

286

A000

**(Question 1 continued)**

(b) Describe why the acceleration of the oil droplet changes.

[2]

.....  
.....  
.....  
.....

(c) (i) Explain why the velocity of the oil droplet is constant for  $t > 3$  s.

[2]

.....  
.....  
.....  
.....

(ii) Deduce the velocity of the oil droplet for  $t > 3$  s.

[2]

.....  
.....  
.....  
.....  
.....  
.....

286

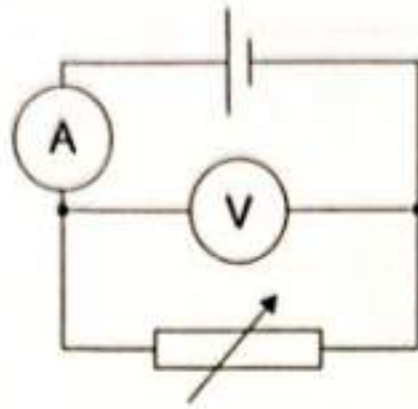
A000



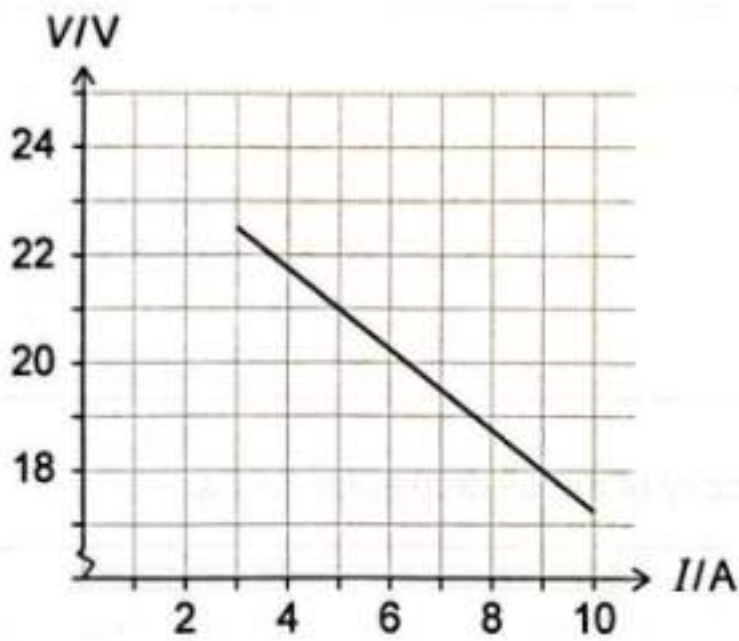
24EP03

Turn over

2. A student is investigating the emf and internal resistance of a cell, using the circuit shown. The ammeter and the voltmeter are ideal.



The graph shows the variation of the voltmeter reading  $V$  with the ammeter reading  $I$ .



- (a) Explain why  $V$  changes when the resistance of the variable resistor is changed. [2]

.....

.....

.....

.....

- (b) Show that the internal resistance of the cell is about  $0.8 \Omega$ . [2]

.....

.....

.....

.....

(This question continues on the following page)



24EP04

(Question 2 continued)

(c) Determine the emf of the cell.

[2]

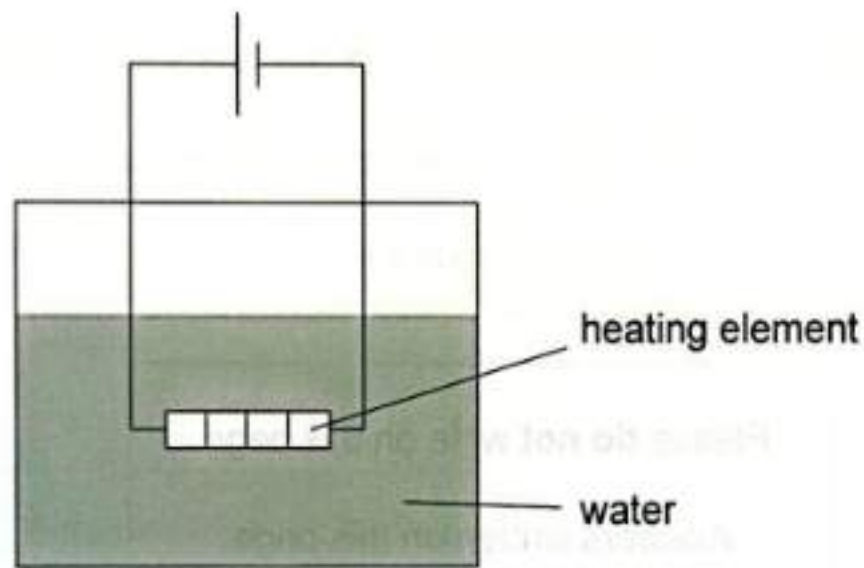
.....

.....

.....

.....

(d) The student then replaces the variable resistor with an electric heating element in order to investigate the thermal output of the system. The heating element is used to raise the temperature of the water to the boiling point.



After the boiling point is reached, 12 g of the water are vaporized. The specific latent heat of vaporization of water is  $2.3 \times 10^6 \text{ J kg}^{-1}$ .

(i) Calculate the change in entropy of the vaporized water.

[2]

.....

.....

.....

.....

(ii) Explain why this entropy change is positive.

[1]

.....

.....

286

A000



24EP05

Turn over

286

Please do not write on this page.

Answers written on this page  
will not be marked.

A000



24EP06

3. A mass-spring system oscillates on a frictionless horizontal surface with simple harmonic motion. The mass  $m$  oscillates with angular frequency  $\omega$ .

The total energy is  $E_T = \frac{1}{2}m\omega^2x_0^2$ , where  $x_0$  is the maximum displacement.

- (a) Show that  $E_T$  can be written as  $E_T = \frac{1}{2}kx_0^2$ , where  $k$  is the spring constant. [2]

.....  
.....  
.....  
.....

In a first trial, the spring is compressed by 0.15 m, and the mass is released from rest.

- (b) Calculate the maximum elastic potential energy of this system.

$k = 24.5 \text{ N m}^{-1}$  [1]

.....  
.....

- (c) In a second trial, the mass is doubled, and the spring is compressed by the same amount as before.

Determine  $\frac{\text{maximum speed of the mass in the first trial}}{\text{maximum speed of the mass in the second trial}}$ . [2]

.....  
.....  
.....  
.....

286

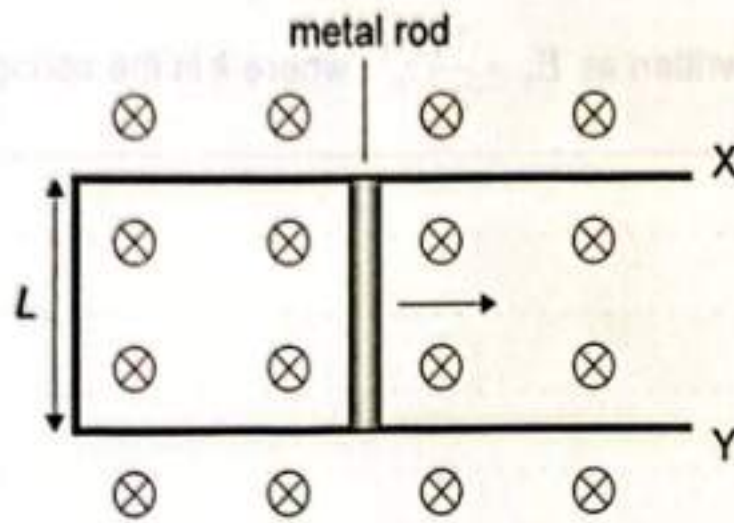
A000



24EP07

Turn over

4. A metal rod is pulled along two horizontal conducting rails X and Y so that it rolls to the right at a constant speed. The two rails are connected by a straight conducting wire of Length  $L = 0.60\text{m}$ . The system is in a region of uniform magnetic field of magnitude  $B = 1.2\text{T}$  directed into the page.



(a) As a result of the motion, the metal rod experiences a magnetic force of  $0.084\text{N}$ .

- (i) Show that the current in the metal rod is about  $0.1\text{A}$ . [1]

286

.....

.....

- (ii) State the direction of the magnetic force on an electron in the metal rod. [1]

.....

.....

- (iii) The magnitude of the magnetic field on the right-hand side of the rod is different from that on the left-hand side. Explain why. [3]

A000

.....

.....

.....

.....

.....

.....

(This question continues on the following page)



24EP08

**(Question 4 continued)**

(iv) Outline how Lenz's law applies to this system.

[2]

.....  
.....  
.....  
.....

(b) Determine, using your answer from (a)(i), the force per unit length between rails X and Y. State the fundamental SI units for your answer.

[3]

.....  
.....  
.....  
.....  
.....  
.....

286

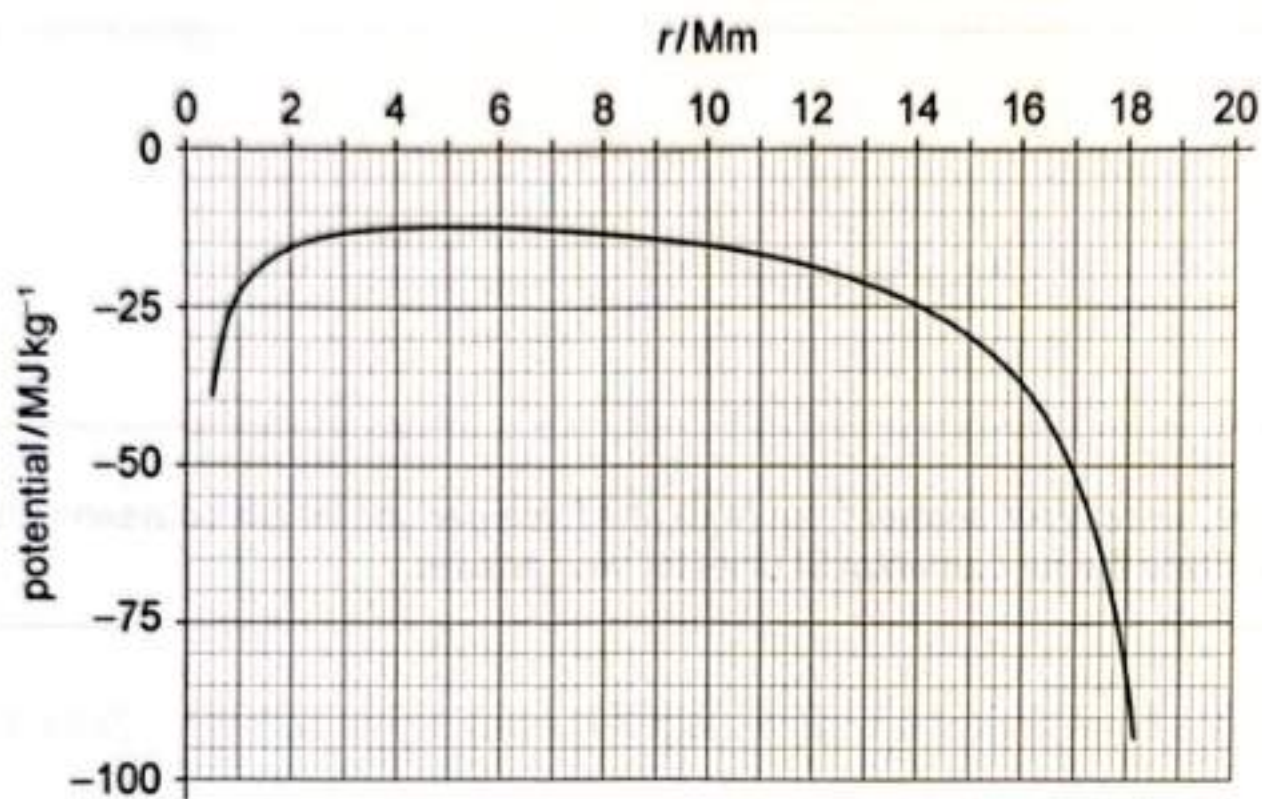
A000



24EP09

Turn over

5. A moon M orbits a planet P. The graph shows the variation of the gravitational potential  $V_g$  with distance  $r$ . The graph is drawn between the surface of M and the surface of P.



286

- (a) Determine the gravitational field strength at  $r = 15 Mm$ .

[2]

.....

.....

.....

.....

(This question continues on the following page)

A000



24EP10

**(Question 5 continued)**

(b) The distance between the centres of M and P is 19.6 Mm.

(i) Determine the radius of P. [1]

.....  
.....

(ii) A spacecraft travels from the surface of P to the surface of M. The work done by the gravitational force on the spacecraft to reach M is  $-8.1 \times 10^{10}$  J.

Calculate the mass of the spacecraft. [2]

.....  
.....  
.....  
.....

286

A000



24EP11

Turn over

6. A short-range attractive force operates between nucleons.

(a) (i) State the name of this force.

[1]

.....  
.....

(ii) State and explain **one** piece of evidence that suggests the presence of this force.

[2]

.....  
.....  
.....  
.....

286

(b) Radioactive potassium-40 ( ${}^{40}_{19}\text{K}$ ) undergoes  $\beta^-$  decay to form a nuclide of argon (Ar).

(i) Write down the complete equation for this radioactive decay.

[2]

${}^{40}_{19}\text{K} \rightarrow$

(ii) In one decay, a negative beta particle is emitted at a speed of  $580 \text{ ms}^{-1}$ .

Calculate the de Broglie wavelength of the beta particle.

[1]

.....  
.....

A000

(This question continues on the following page)



24EP12

**(Question 6 continued)**

(c) A sample of potassium has a mass of 5.00g. The sample contains 0.012% of potassium-40 by mass. The remainder of the sample is a stable nuclide of potassium. The half-life of potassium-40 is  $1.28 \times 10^9$  years.

(i) Show that the decay constant of potassium-40 is about  $1.7 \times 10^{-17} \text{ s}^{-1}$ . [1]

.....  
.....

(ii) The mass of one mole of potassium is  $39.1 \text{ g mol}^{-1}$ .  
Determine the initial activity of the sample. [2]

.....  
.....  
.....  
.....

(iii) Estimate the time taken for the potassium-40 to decrease to 98% of the initial amount. [2]

.....  
.....  
.....  
.....

286

A000



24EP13

Turn over

7. Star A is a main sequence star.

The data for Star A and the Sun are given in a table.

	Value
Surface temperature of Star A	5200K
Surface temperature of the Sun	5800K
Parallax angle	0.74 arcsec
Radius of Star A	$0.9R_{\odot}$
Radius of the Sun	$R_{\odot}$
Luminosity of the Sun	$L_{\odot}$

(a) (i) State how physical stability is maintained in main sequence stars. [1]

286

.....

.....

(ii) Explain why nuclear fusion in the core of the star occurs when the temperature and density exceed threshold values. [2]

.....

.....

.....

.....

A000

(iii) Outline why regions of convection form in Star A. [2]

.....

.....

.....

.....

(This question continues on the following page)



24EP14

**(Question 7 continued)**

(b) (i) Calculate, in m, the distance to Star A from Earth. [1]

.....  
.....

(ii) Show that the luminosity of Star A is about half that of the Sun. [1]

.....  
.....  
.....

(iii) Deduce the apparent brightness of Star A from Earth in terms of the luminosity of the Sun. [3]

.....  
.....  
.....  
.....  
.....  
.....

286

**(This question continues on the following page)**

A000

.....  
.....  
.....

.....  
.....  
.....

.....  
.....  
.....

Turn over



24EP15

(Question 7 continued)

(c) (i) Show that the peak wavelength emitted from Star A is about 560 nm. [1]

.....  
.....

(ii) Calculate the energy of a photon of light emitted at this peak wavelength. [2]

.....  
.....  
.....  
.....

(iii) The peak wavelength of the radiation from Star A is measured by an observer on Earth. The observed wavelength is 0.007 % less than the value in (c)(i).

Outline how this difference arises. [2]

.....  
.....  
.....  
.....

(iv) Determine the speed, in  $\text{km s}^{-1}$ , of Star A relative to Earth. [2]

.....  
.....  
.....  
.....

(This question continues on the following page)



24EP16

(Question 7 continued)

(d) Describe how the light from stars is studied to determine their composition.

[3]

.....

.....

.....

.....

.....

.....

286

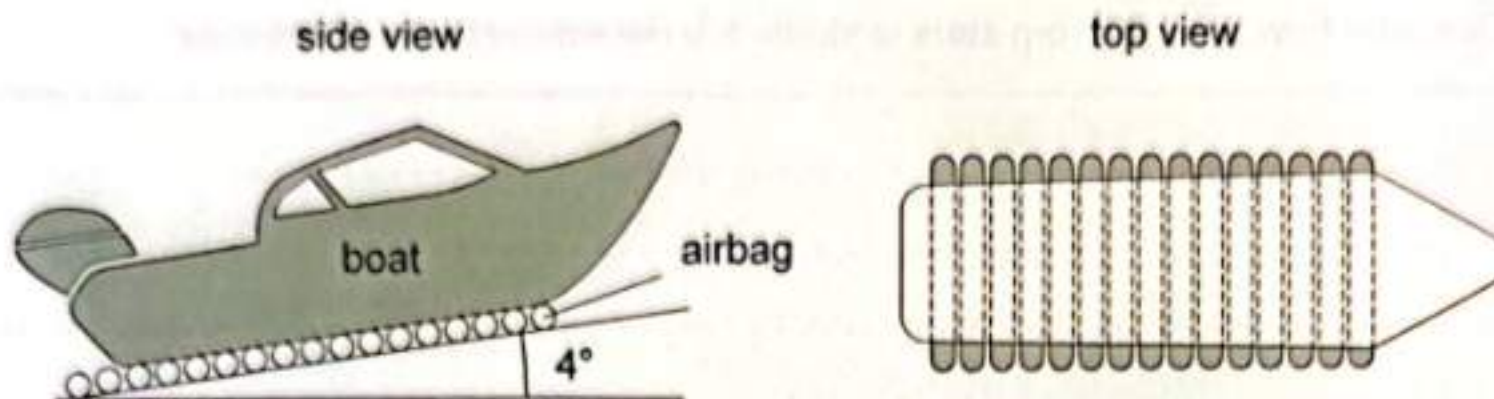
A000



24EP17

Turn over

8. A boat is moved from land to water by rolling it across a set of cylindrical airbags.



(a) When fully inflated, an unloaded airbag has a diameter of 1.80 m and a length of 24.0 m. At a temperature of 15°C, an airbag can hold 4200 mol of gas.

(i) Show that the pressure in an airbag is about 0.2 MPa.

[2]

286

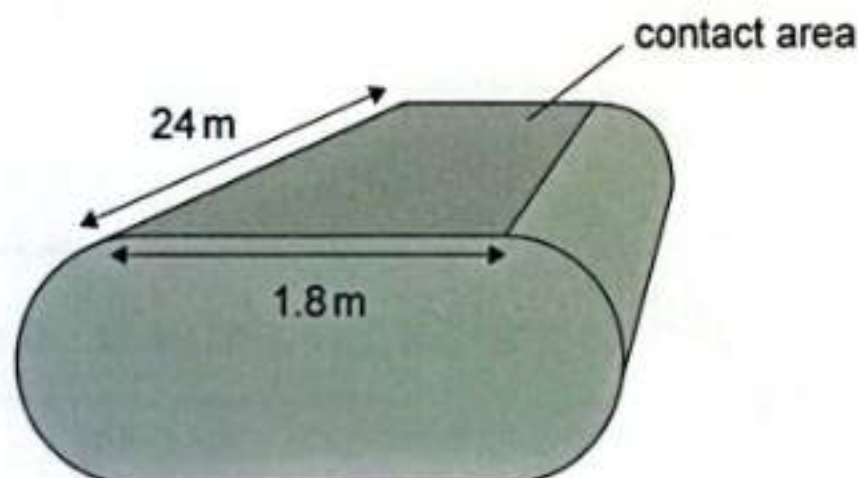
.....

.....

.....

.....

When the boat is placed on the airbags, the airbags are compressed so that the effective contact area is as shown in the diagram.



In this arrangement, the maximum safe pressure before an airbag bursts is four times the value calculated in (a)(i). The boat is supported by airbags on a slope that is at an angle of 4.0° to the horizontal. There are fifteen airbags supporting the boat at all times.

(This question continues on the following page)



24EP18

**(Question 8 continued)**

(ii) Estimate the maximum safe mass that this arrangement can hold. [3]

.....  
.....  
.....  
.....  
.....  
.....

(iii) Identify an assumption used in this estimation. [1]

.....  
.....

286

The boat is then released to roll down across the airbags. When the boat loses contact with an airbag at the top of the slope, the airbag expands adiabatically.

(iv) Outline the change in internal energy of the gas in the airbag. [2]

.....  
.....  
.....  
.....

A000

**(This question continues on the following page)**



24EP19

Turn over

**(Question 8 continued)**

(b) A boat is released from rest down the slope, and it travels 14 m in 8.0 s. The mass of the boat is  $4.5 \times 10^6$  kg.

(i) Calculate the average acceleration of the boat. [1]

.....  
.....

(ii) Show that the net resistive forces on the boat are about 1.1 MN. [2]

.....  
.....  
.....  
.....

(iii) Draw a free-body diagram for the boat while it is moving. [2]

**(This question continues on the following page)**



24EP20

**(Question 8 continued)**

(c) Another way to move a boat down a ramp is to place it on rigid rods. Assume that the same boat is now moved on rods of diameter 1.80 m with the same boat acceleration as before.

(i) Show that the angular displacement of a rod during the first 8.0 s of the motion is about 8 rad. [1]

.....  
.....

(ii) Outline how two frictional forces lead to the angular acceleration of the rod. [2]

.....  
.....  
.....  
.....

286

**(This question continues on the following page)**

A000

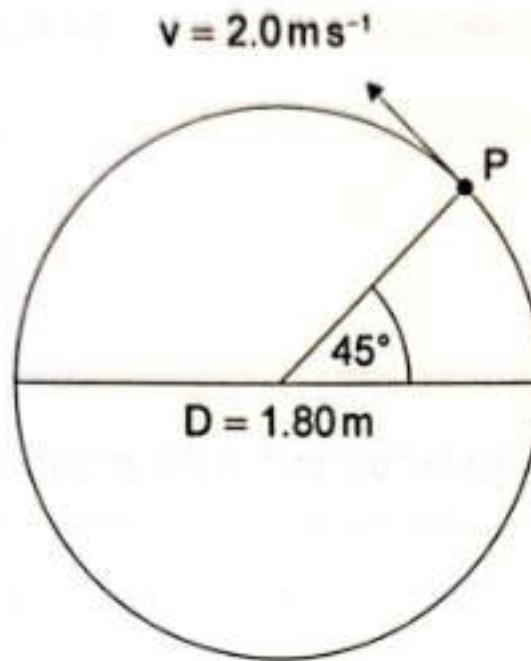


24EP21

Turn over

(Question 8 continued)

- (d) During the testing of the rod, it is rotated about its central axis. Point P is on the surface of the rod. At time  $t = 0$ , P is at a point  $45^\circ$  above the horizontal. The linear speed of P is  $2.0 \text{ m s}^{-1}$ .



286

The vertical displacement  $x$  of P can be modelled with an equation  $x = x_0 \sin(\omega t + \phi)$ .

- (i) Calculate the angular velocity  $\omega$  of P. [1]

.....

.....

- (ii) Calculate the time it will take for P to reach the top of the circle. [1]

.....

.....

A000

- (iii) Determine the vertical velocity of P at  $t = 3.0 \text{ s}$ . [2]

.....

.....

.....

.....



24EP22



286

Please **do not** write on this page.  
Answers written on this page  
will not be marked.

A000



24EP23

